




Shapes with 4 Sides Odd One Out

Count the sides of each shape. Which one is the odd one out? Circle it.



How have you worked out which one is the odd one out?

